




St. Thomas School, Indirapuram

Practice Sheet- 9, Cycle Test-4

Class – I, Sec. \_\_\_\_ Submission Date: 24.01.19

Q1.	Fill in the blanks:	
a.	We need _____ to buy things.	
b.	Currency of India is _____.	
c.	1 rupee = _____paise.	
d.	Rupees is denoted by _____.	
e.	Indian money is in the form of _____ and _____.	
f.	Two notes of ₹ 5 are equal to ₹ _____.	
g.	Two coins of ₹ 2 are equal to ₹ _____.	
h.	Three notes of ₹ 5 are equal to ₹ _____.	
i.	Three coins of ₹ 2 are equal to ₹ _____.	
Q2.	Make the given amount using different combination of coins: ₹ 1, ₹ 2 and ₹ 5	
	  	 = _____  = _____  = _____
Q3.	Find the total amount:	
a.	₹ 5 + ₹ 5 = _____	
b.	₹ 50 + ₹ 20 = _____	
c.	₹ 20 + ₹ 5 = _____	
d.	₹ 20 + ₹ 10 = _____	
e.	₹ 50 + ₹ 5 = _____	
f.	₹ 20 + ₹ 20 = _____	