

St. Thomas School, Indirapuram
Mathematics (Ch- 6)
Worksheet-7, 2019

Name - _____ Class- II _____ Roll No . _____

Q 1) Study the pattern and write what comes next :-

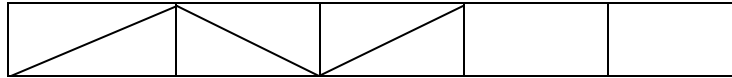
a) 30 , 27 , 24 , _____ , _____ , _____

b) 2R , 3S , 4T , _____ , _____ , _____

c) 8 , 10 , 12 , _____ , _____ , _____

d) 

e)



Q 2) Dodging Tables :-

a) $9 \times 7 = 7 \times \square$

d) $4 \times 3 = 2 \times \square$

b) $8 \times 6 = 40 + \square$

e) $9 \times 9 = 80 + \square$

c) $9 \times 2 = 6 \times \square$

f) $9 \times 10 = 100 - \square$

g) $6 \times 4 = 25 - \square$

h) $10 \times 10 = 90 + \square$


Q 3) Find the missing numbers in the following patterns .

a) 5 , 10 , 15 , _____ , 25 , 30 , _____ , 40

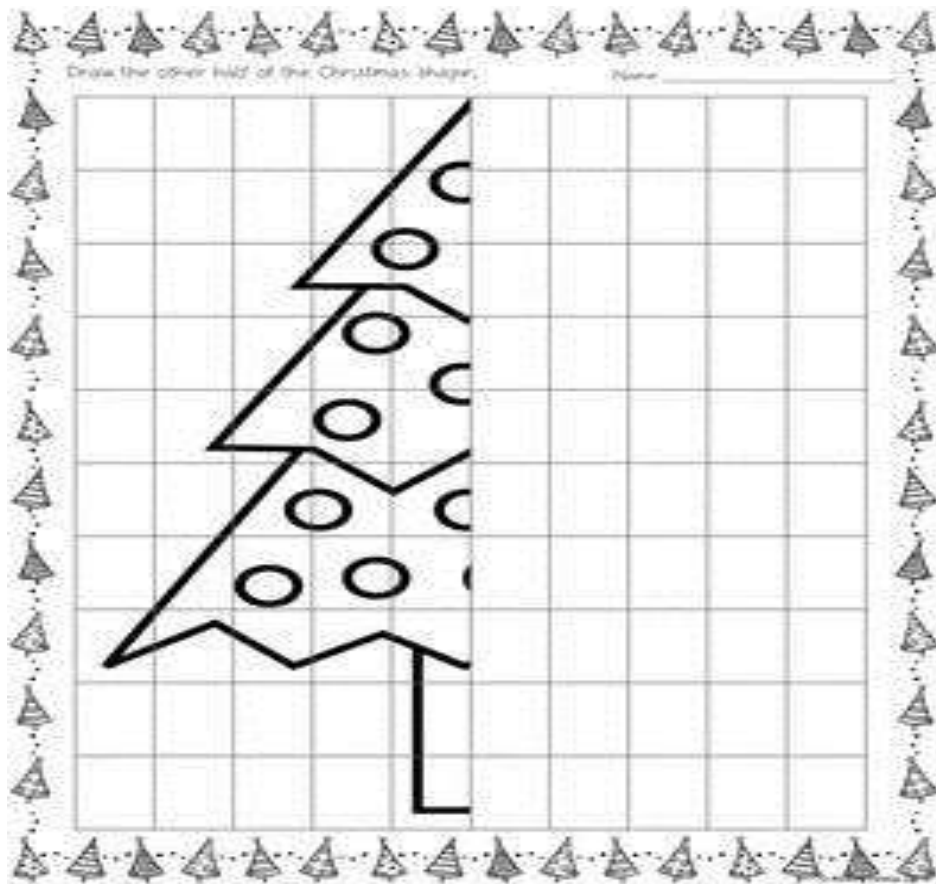
b) 15 , 14 , _____ , 12 , _____ , _____ , 9

c) 27 , 36 , 45 , _____ , 63 , 72 , _____ , 90

Q 4) Complete the border of this greeting card .



Q 5) Draw and colour the other half.



Q 6) Write the terms for the following.

TO

23 → _____

+ 15 → addends

→ _____

TO

67 → minuend

- 14 → _____

→ _____